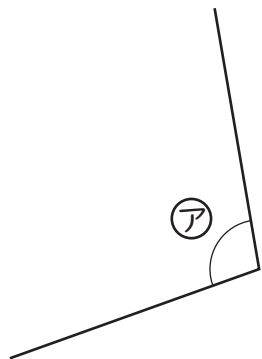


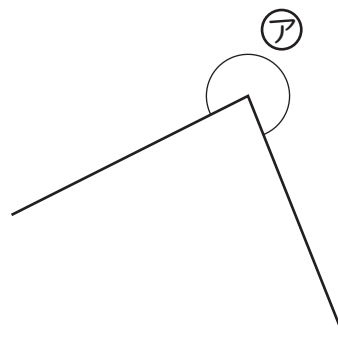
● ①の角度をはかりましょう。

1



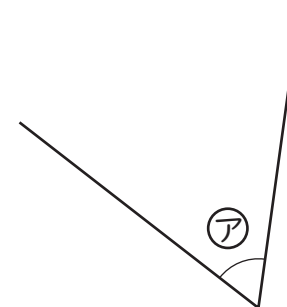
(  $100^\circ$  )

2



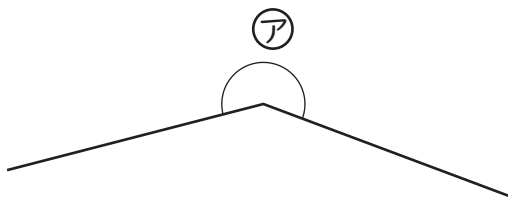
(  $275^\circ$  )

3



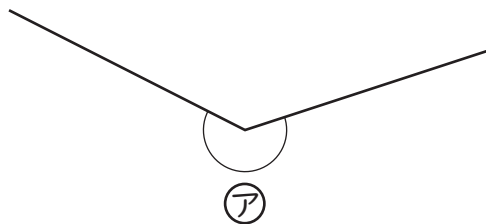
(  $60^\circ$  )

4



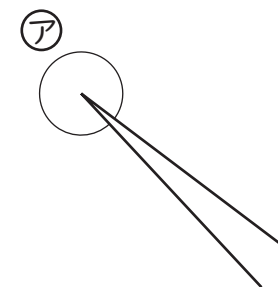
(  $215^\circ$  )

5



(  $225^\circ$  )

6



(  $350^\circ$  )